



# Cambridge IGCSE™

---

## GEOGRAPHY

**0460/42**

Paper 4 Alternative to Coursework

**May/June 2024**

INSERT

**1 hour 30 minutes**

---

### INFORMATION

- This insert contains additional resources referred to in the questions.
- You may annotate this insert and use the blank spaces for planning. **Do not write your answers** on the insert.



---

This document has **12** pages. Any blank pages are indicated.

Table 1.1 for Question 1

## Risk assessment of hazards

<b>description of the hazard</b>	<b>chance of the hazard happening</b> 1 (little chance) to 5 (greatest chance)	<b>how severe the impacts would be</b> 1 (little danger) to 5 (very dangerous)	<b>risk from the hazard</b> (chance of it happening × how severe the impacts would be)	<b>management</b> (what can be done to reduce the risk)
volcano erupts	1	5	5	check volcanic activity before setting off
wild animals	2	3	6	do not disturb or go close to them
extreme weather	4	4	16	check the weather forecast before setting off
hypothermia from getting cold and wet	3	4	12	
uneven ground and slippery rocks	2	2	4	
getting lost or separated from others	2	3	6	

**Fig. 1.1 for Question 1****Fieldwork equipment**

Table 1.2 for Question 1

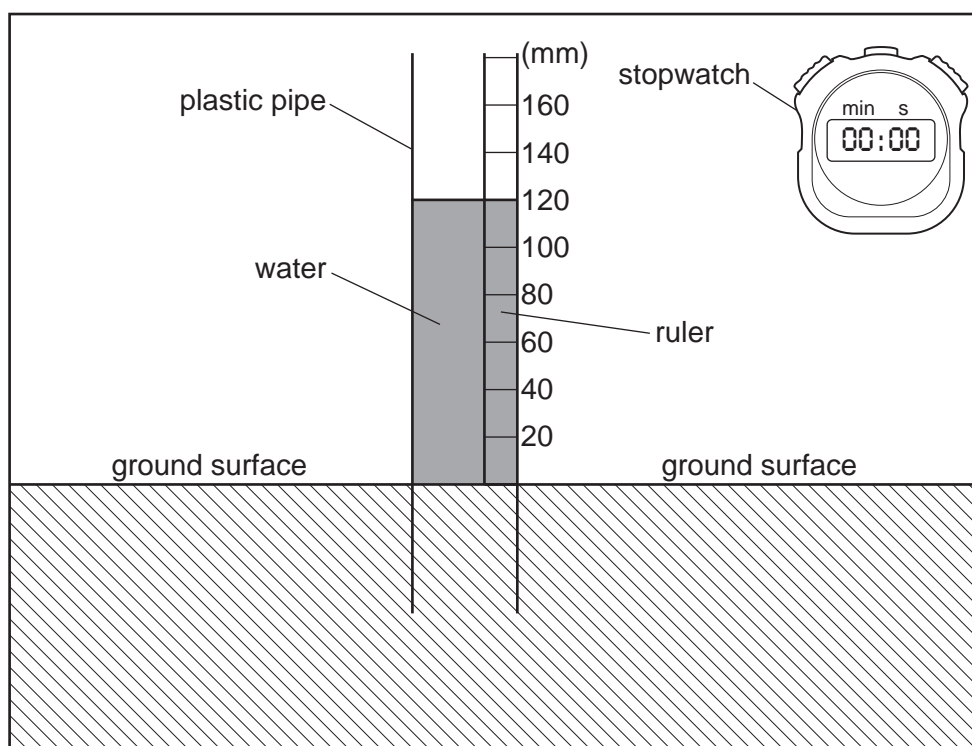
Results of vegetation cover measurements

	site A at 3700 m above sea level			site B at 3780 m above sea level			site C at 3850 m above sea level		
	measurement 1 (%)	measurement 2 (%)	average (%)	measurement 1 (%)	measurement 2 (%)	average (%)	measurement 1 (%)	measurement 2 (%)	average (%)
bare rock	12	9	11	20	70	45	97	92	94
bare soil	40	61	50	60	9	35	0	2	1
sparse vegetation cover	14	4	9	3	6	4	3	5	4
medium vegetation cover	18	12	15	10	13	12	0	0.5	1
dense vegetation cover	16	14	15	7	2	4	0	0	0

Average percentage figures have been rounded up or down to whole numbers.

Fig. 1.3 for Question 1

## How the students measured infiltration



The students used a **plastic pipe** which they pushed into the ground to the same depth at each site. The students put a **ruler** which measured in millimetres inside the pipe. They poured water into the pipe up to a height of 120 mm. They recorded the water height in the pipe after 10 minutes, timed by a **stopwatch**.

Table 1.3 for Question 1

## Results of infiltration measurements

fall in water level at site A at 3700 m above sea level (mm)		fall in water level at site B at 3780 m above sea level (mm)		fall in water level at site C at 3850 m above sea level (mm)	
measurement 1	15	measurement 1	55	measurement 1	85
measurement 2	10	measurement 2	40	measurement 2	14
average	12.5	average	<b>47.5</b>	average	49.5

Fig. 2.1 for Question 2

## Residential areas in Hong Kong

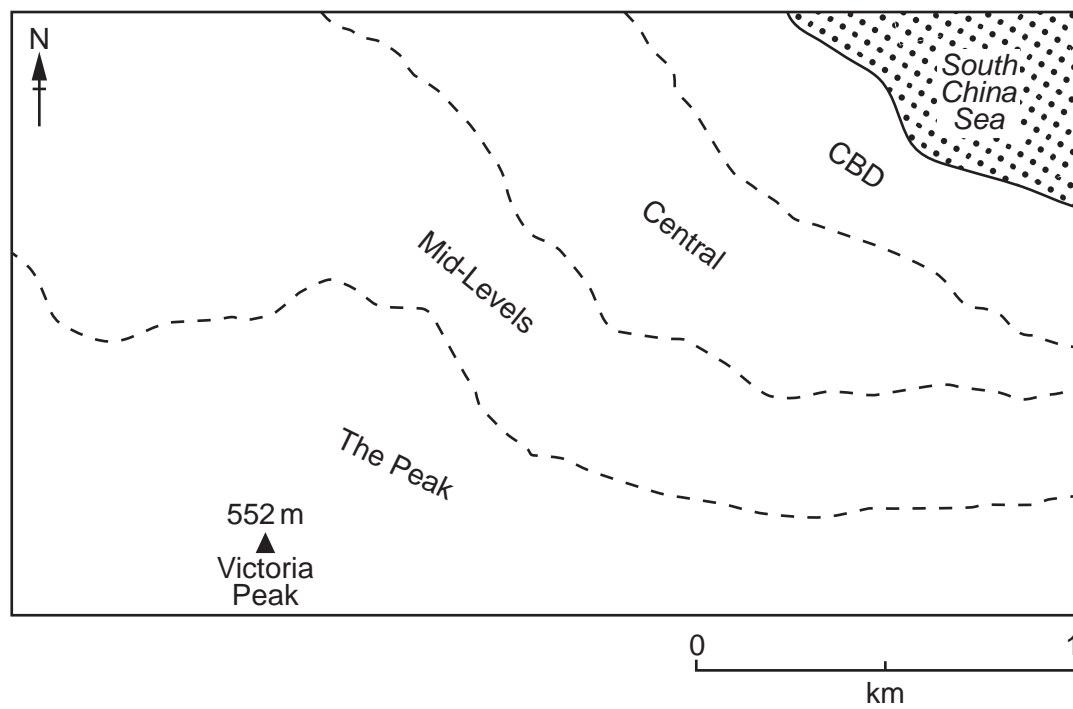


Fig. 2.2 for Question 2

## Student survey recording sheet

Environmental quality survey					
Residential area:	The Peak	Mid-Levels	Central	(circle the area)	
	-2	-1	0	+1	+2
bad ←————→ good					
feature					
traffic congestion					
noise level					
air quality					
safety					
cleanliness					
vegetation					
amenities					
vandalism and graffiti					



Table 2.1 for Question 2

## Results of environmental quality survey

	The Peak	Mid-Levels	Central
traffic congestion	+2	−1	−2
noise level	+2	0	−2
air quality	+2	+1	−1
safety	+2	+1	−1
cleanliness	+1	-1	0
vegetation	+2	<b>+1</b>	−1
amenities	0	<b>+1</b>	+1
vandalism and graffiti	+2	<b>+2</b>	+1
total score	+13	+4	−5



Table 2.2 for Question 2

## Results of noise level measurements

residential area	measuring site	noise level (decibels)
The Peak	1	65
	2	71
	3	64
Mid-Levels	4	78
	5	75
	6	78
	7	77
Central	8	81
	9	80
	10	80
	11	80
	12	85

Table 2.3 for Question 2

## Results of traffic count



residential area		measuring site	number of vehicles
The Peak	edge of city 	1	60
		2	31
		3	72
Mid-Levels		4	69
		5	77
		6	91
		7	19
Central	 edge of CBD	8	80
		9	59
		10	<b>76</b>
		11	28
		12	49

Table 2.4 for Question 2

## Types of vehicles at three sites

vehicle category	The Peak (site 1)	Mid-Levels (site 5)	Central (site 10)
	percentage of vehicles (%)		
bicycle/motorbike	14	9	3
car	41	45	43
taxi	39	11	14
bus/coach	1	9	6
van/lorry/truck	5	26	34

**BLANK PAGE**

---

The boundaries and names shown, the designations used and the presentation of material on any maps contained in this question paper/insert do not imply official endorsement or acceptance by Cambridge Assessment International Education concerning the legal status of any country, territory, or area or any of its authorities, or of the delimitation of its frontiers or boundaries.

Permission to reproduce items where third-party owned material protected by copyright is included has been sought and cleared where possible. Every reasonable effort has been made by the publisher (UCLES) to trace copyright holders, but if any items requiring clearance have unwittingly been included, the publisher will be pleased to make amends at the earliest possible opportunity.

To avoid the issue of disclosure of answer-related information to candidates, all copyright acknowledgements are reproduced online in the Cambridge Assessment International Education Copyright Acknowledgements Booklet. This is produced for each series of examinations and is freely available to download at [www.cambridgeinternational.org](http://www.cambridgeinternational.org) after the live examination series.

Cambridge Assessment International Education is part of Cambridge Assessment. Cambridge Assessment is the brand name of the University of Cambridge Local Examinations Syndicate (UCLES), which is a department of the University of Cambridge.